

1. Trace and say.

1 2 3 4 5 6 7 8

2. How many birds?



3. Colour all the triangles.



4. 0, 1, 2, 3,





5. How many birds?



Strand Activity



How many of your handspans will cover this page?  
Compare with others.

Use the space to share your answers.

1. Trace and say.

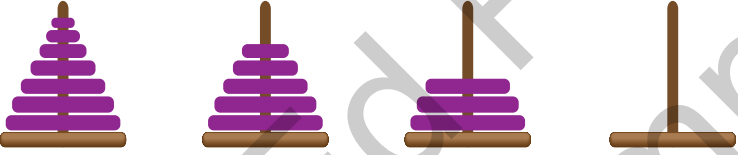
114 113 112 111


2. (a)  $6 - 1 = \square$  (b)  $7 - 1 = \square$

3. Add 1 (+ 1) to each number.

(a) 3  (c) 8  (e) 10   
 (b) 19  (d) 17  (f) 14

4. Finish the patterns. Tick whether the pattern is growing or shrinking.

(a)  growing   
 shrinking

(b)  growing   
 shrinking

Strand Activity



Draw an object you might find at school or at home that is shaped like a circle.

Use the space to share your answers.

1. Trace and say.

65    64    63    62    61

2. (a) The time on the left

wheel is  o'clock.

(b) The time on the right

wheel is  o'clock.

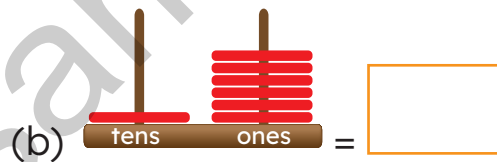
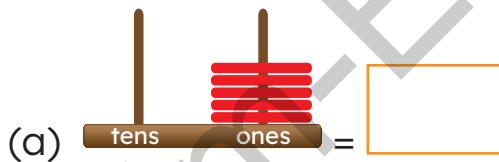


3. Order from smallest to largest.

4, 19, 37, 80, 63, 7, 41, 28, 52



4. Read the abacuses.



Strand Activity



Numbers are everywhere!

It is Ethan's 5th birthday! Draw and label two objects at Ethan's birthday party that have numbers on them.

Use the space to share your answers.

1. Start at 60. Show your jump counting in 5s. (+ 5)



2. The spider turned:

(a) left at the sign.

(b) right at the sign.



3. The sign is closer to:

(a) Carlow.

(b) Wexford.

4. Write as numbers. (a) four

(b) nine

(c) eleven

5. A bike shop has 10 new bikes.

How many wheels are there altogether?



6. 2 tens plus 9 ones =

+

=

Strand Activity



Draw a car. Draw an object shorter than a car.

Use the space to share your answers.

1.  $8 \text{ tens} + 3 \text{ ones} =$

2. What is the cost if you buy:


(a) both icy treats?  cents

(b) 2 ice creams and 1 ice lolly?  cents

(c) 1 ice cream and 3 ice lollies?  cents



3. Pick out the odd shape.



4. To grow a large oak tree from a seed will take:

(a) years.  (b) days.  (c) weeks.  (d) months.



Strand Activity



Draw 4 pictures to show the typical weather in each of the 4 seasons. Compare your pictures with others.